

සියලු ම හිමිකම් ඇවිරිණි / முழுப் பதிப்புரிமையுடையது / All Rights Reserved

ශ්‍රී ලංකා විභාග දෙපාර්තමේන්තුව ශ්‍රී ලංකා විභාග දෙපාර්තමේන්තුව ශ්‍රී ලංකා විභාග දෙපාර්තමේන්තුව ශ්‍රී ලංකා විභාග දෙපාර්තමේන්තුව ශ්‍රී ලංකා විභාග දෙපාර්තමේන්තුව  
 இலங்கைப் பரீட்சைத் திணைக்களம் இலங்கைப் பரීட்சைத் திணைக்களம் இலங்கைப் பரීட்சைத் திணைக்களம் இலங்கைப் பரීட்சைத் திணைக்களம் இலங்கைப் பரීட்சைத் திணைக்களம்  
 Department of Examinations, Sri Lanka Department of Examinations, Sri Lanka Department of Examinations, Sri Lanka Department of Examinations, Sri Lanka Department of Examinations, Sri Lanka  
 இலங்கைப் பரීட்சைத் திணைக்களம் இலங்கைப் பரීட்சைத் திணைக்களம் இலங்கைப் பரීட்சைத் திணைக்களம் இலங்கைப் பரීட்சைத் திணைக்களம் இலங்கைப் பரීட்சைத் திணைக்களம்  
 Department of Examinations, Sri Lanka Department of Examinations, Sri Lanka Department of Examinations, Sri Lanka Department of Examinations, Sri Lanka Department of Examinations, Sri Lanka

80 E I, II

අධ්‍යයන පොදු සහතික පත්‍ර (සාමාන්‍ය පෙළ) විභාගය, 2021(2022)  
 கல்விப் பொதுத் தராதரப் பத்திர (சாதாரண தர)ப் பரீட்சை, 2021(2022)  
 General Certificate of Education (Ord. Level) Examination, 2021(2022)

තොරතුරු හා සන්නිවේදන තාක්ෂණය I, II  
 தகவல், தொடர்பாடல் தொழினுட்பவியல் I, II  
 Information & Communication Technology I, II

පැය තුනයි  
 மூன்று மணித்தியாலங்கள்  
 Three hours

අමතර කියවීමේ කාලය - මිනිත්තු 10 යි  
 மேலதிக வாசிப்பு நேரம் - 10 நிமிடங்கள்  
 Additional Reading Time - 10 minutes

Use additional reading time to go through the question paper, select the questions and decide on the questions that you give priority in answering.

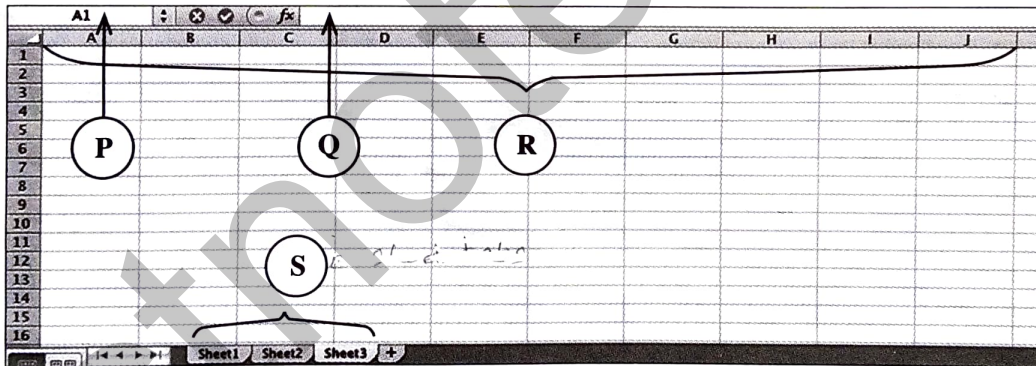
### Information & Communication Technology I

#### Instructions:

- \* Answer all questions.
- \* In each of the questions 1 to 40, pick one of the alternatives (1), (2), (3), (4) which is correct or most appropriate.
- \* Mark a cross (X) on the number corresponding to your choice in the answer sheet provided.
- \* Further instructions are given on the back of the answer sheet. Follow them carefully.

1. Which of the following is an example for a data processing task of a user?
  - (1) Installing word processing software in a personal computer
  - (2) Formatting the hard disk in a personal computer
  - (3) Reading an online newspaper using a web browser
  - (4) Calculating the average marks obtained by a student using a spreadsheet software
2. Which of the following group consists of only input devices?
  - (1) Barcode Reader, CRT Monitor, Joystick
  - (2) Barcode Reader, Plotter, Webcam
  - (3) Keyboard, Mouse, Scanner
  - (4) Multimedia Projector, Printer, Scanner
3. Which of the following **cannot** be used to permanently store data?
  - (1) Hard disk
  - (2) Magnetic tape
  - (3) Random Access Memory (RAM)
  - (4) USB Flash Drive
4. Which of the following correctly shows the given storage components of a particular computer system in **descending** order of their storage capacity?
  - (1) Hard disk, Cache memory, Main memory
  - (2) Hard disk, Main memory, Cache memory
  - (3) Main memory, Cache memory, Hard disk
  - (4) Main memory, Hard disk, Cache memory
5. In a ..... network topology, each network component is physically connected to a central node such as a hub or a switch.
  - (1) bus
  - (2) mesh
  - (3) ring
  - (4) star
6. Krishna accessed the official web portal of the government of Sri Lanka (<http://www.gov.lk>) to renew her vehicle revenue licence online. Which of the following services was obtained by her?
  - (1) G2B
  - (2) G2C
  - (3) G2E
  - (4) G2G

7. If the character "A" is represented as  $1000001_2$  in ASCII coding scheme, what character will be represented by  $1000100_2$ ?
- (1) B (2) C (3) D (4) E
8. Which of the following represents the given four numbers in the **descending** order?
- (1)  $10011110_2$ ,  $157_{10}$ ,  $9C_{16}$ ,  $233_8$   
 (2)  $157_{10}$ ,  $10011110_2$ ,  $9C_{16}$ ,  $233_8$   
 (3)  $233_8$ ,  $10011110_2$ ,  $157_{10}$ ,  $9C_{16}$   
 (4)  $9C_{16}$ ,  $233_8$ ,  $10011110_2$ ,  $157_{10}$
9. Which of the following is the **first** software that must be installed on a computer after formatting its hard disk?
- (1) Office package  
 (2) Operating system  
 (3) Antivirus software  
 (4) Web browser
10. Which of the following group consists of only language translators?
- (1) Assembler, Compiler, Interpreter  
 (2) Interpreter, Compiler, Web browser  
 (3) Assembler, Operating system, Compiler  
 (4) Web browser, Operating system, Interpreter
11. What is the shortcut key combination to "Find and Replace" words in *Microsoft Word* or *LibreOffice Writer*?
- (1) Ctrl+A (2) Ctrl+C (3) Ctrl+H (4) Ctrl+X
12. Consider the following spreadsheet segment with four components labelled as P, Q, R and S:



Which of the following represents the P, Q, R and S labels in the correct order?

- (1) Column Headings, Formula Bar, Name Box, Sheet Tabs  
 (2) Name Box, Column Headings, Sheet Tabs, Formula Bar  
 (3) Name Box, Formula Bar, Column Headings, Sheet Tabs  
 (4) Sheet Tabs, Formula Bar, Column Headings, Name Box

- Consider the following segment of a marksheet entered into an electronic spreadsheet to answer questions 13 and 14:

	A	B	C	D	E
1	Name	ICT	Maths	Religion	Total
2	Sahan	60	55	70	
3	Oshini	35	absent	60	
4	Raji	75	65	absent	
5	Pooja	55	45	75	
6					
7					

13. What is the correct formula to be entered in cell E2 to calculate the total marks obtained by Sahan?
- (1) =B2+C2+D2      (2) B2+C2+D2      (3) E2=B2+C2+D2      (4) E2->B2+C2+D2
14. What will be the value displayed in cell A7 if the formula =COUNT(A1:D5) is entered into it?
- (1) 10      (2) 12      (3) 16      (4) 20
15. Which of the following actions can be used to move to the next slide in a slide show of an electronic presentation?
- A - Clicking the "Left" button of the mouse device  
 B - Pressing the "Ctrl" key of the keyboard  
 C - Pressing the "Right arrow" key of the keyboard
- (1) A and B only      (2) A and C only      (3) B and C only      (4) All A, B and C
16. Which of the following statements are correct regarding relational databases?
- A - A *record* is a collection of fields.  
 B - A *table* is a collection of records.  
 C - A *relational database* is a collection of tables.
- (1) A and B only      (2) A and C only      (3) B and C only      (4) All A, B, and C
- Questions 17 to 19 are based on the following partly shown database tables that are used to store data about students, subjects and enrollment details in a school.

**Student**

Student_ID	Student_Name
1001	Saman
1002	Raj
1003	Sharaf
1004	Shane

**Subject**

Subject_ID	Subject_Name	Teacher_Name
S001	Chemistry	Perera
S002	Physics	Selvam
S003	Combined Maths	Nazwar
S004	Geography	Silva
S005	Political Science	Almeida

**Enroll**

Student_ID	Subject_ID	Date
1001	S002	04/01/2022
1005	S001	05/01/2022
1003	S002	09/01/2022
1001	S003	04/01/2022

17. What would be the primary key of the Enroll table?
- (1) Student\_ID      (2) Subject\_ID  
 (3) Subject\_ID + Date      (4) Student\_ID + Subject\_ID
18. What would be a foreign key in the database?
- (1) Subject\_ID in the Subject table      (2) Student\_ID in the Student table  
 (3) Date in the Enroll table      (4) Subject\_ID in the Enroll table

19. Shane dropped the “Geography” subject and enrolled for the “Political Science” subject. Which table/tables needs/need to be updated for this purpose?

- (1) Subject table (2) Subject table and Enroll table  
 (3) Enroll table (4) Student table, Subject table and Enroll table

20. Which of the following is the correct HTML tag sequence for a web page?

- (1) HTML, Body, Title, Head (2) HTML, Head, Title, Body  
 (3) HTML, Title, Head, Body (4) Head, Title, HTML, Body

21. Which of the following statements are correct?

- A - HTML tags determine how the web pages are displayed in a web browser.  
 B - A URL uniquely identifies a web page on the World Wide Web (WWW).  
 C - Hyperlinks allow to link web pages on the World Wide Web.

- (1) A and B only (2) A and C only (3) B and C only (4) All A, B and C

22. What is the correct HTML statement for creating a hyperlink to the official web portal of the Government of Sri Lanka (<http://www.gov.lk>)?

- (1) `<a href="http://www.gov.lk"> Government of Sri Lanka Web Portal </a>`  
 (2) `<a> "http://www.gov.lk" </a> Government of Sri Lanka Web Portal`  
 (3) `<a src="http://www.gov.lk" </a> Government of Sri Lanka Web Portal`  
 (4) `<a url="http://www.gov.lk"> Government of Sri Lanka Web Portal </a>`

23. Consider the following HTML statements for creating a table:

```
<html>
<body>
<table border=2>
<tr> <th>Company Name </th> <th> Contact Number </th> </tr>
<tr> <td rowspan=2> ABC Ltd </td> <td> 011-2222222 </td> </tr>
<tr> <td> 011-9999999 </td> </tr>
<tr> <td> XYZ & Sons </td> <td> 011-7777777 </td> </tr>
</table>
</body>
</html>
```

Which of the following is the correct table created by the above statements?

(1) 

Company Name	Contact Number
ABC Ltd	011-2222222
	011-9999999
XYZ & Sons	011-7777777

(2) 

Company Name	Contact Number
ABC Ltd	011-2222222
XYZ & Sons	011-7777777
	011-9999999

(3) 

Company Name	ABC Ltd	XYZ & Sons
Contact Number	011-2222222	011-7777777
		011-9999999

(4) 

Company Name	ABC Ltd	XYZ & Sons
Contact Number	011-2222222	011-7777777
	011-9999999	

24. Which of the following is a correct example for an Internet Protocol (IP) address?


- (1) 172.64.85 (2) 172.64.85.24 (3) 192.214.78.80.1 (4) 192.214.78.256

25. Which of the following is the commonly used folder that stores deleted messages in an email system?

- (1) Draft (2) Inbox (3) Spam (4) Trash

26. Consider the following URL:

Which of the following correctly identifies the parts A, B and C of the above URL?

- (1) A-domain name, B-protocol, C-top level domain
  - (2) A-domain name, B-top level domain, C-protocol
  - (3) A-protocol, B-domain name, C- top level domain
  - (4) A-protocol, B- top level domain, C-domain name
27. Which of the following combinations correctly shows an internet service and its corresponding protocol?
- (1) Email, SMTP
  - (2) WWW, FTP
  - (3) Email, FTP
  - (4) File Transfer, SMTP
28. Which of the following best describes the  icon in GIMP image manipulation software?
- (1) blurs or sharpens an image
  - (2) copy one part of a graphic to another part
  - (3) lightens or darkens an image's shadows
  - (4) removes unnecessary colours and spots in an image
29. Consider the following statement with blanks labelled (A) and (B):  
The primary colours .....(A)..... are used to create images on computer screens with each colour having .....(B)..... colour variations, if represented with 8-bits.  
Which of the following is suitable to fill in the blanks labelled (A) and (B), respectively?
- (1) (A): Red, Green, Blue    (B): 128
  - (2) (A): Red, Green, Blue    (B): 256
  - (3) (A): Yellow, Blue, Red    (B): 128
  - (4) (A): Yellow, Blue, Red    (B): 256
30. A ..... spreads by inserting copies of itself into executable files in a computer.
- (1) computer worm
  - (2) hijacker
  - (3) spyware
  - (4) trojan horse
31. Which of the following could arise due to the usage of ICT?
- A - e-waste problems  
B - security threats  
C - health hazards
- (1) A and B only
  - (2) A and C only
  - (3) B and C only
  - (4) All A, B and C
32. Which of the following statements are true with regard to the pilot deployment of a new software system?
- A - The existing system is replaced by the new system as soon as its development is completed.  
B - Introduce the newly developed system to a selected set of users before making it available to all.  
C - The new system is deployed in stages and the success of each stage leads to the next stage.
- (1) A only
  - (2) B only
  - (3) C only
  - (4) A and B only
33. Which of the following control structures can be used in an algorithm?
- A - Sequence  
B - Repetition  
C - Selection
- (1) A and B only
  - (2) A and C only
  - (3) B and C only
  - (4) All A, B and C

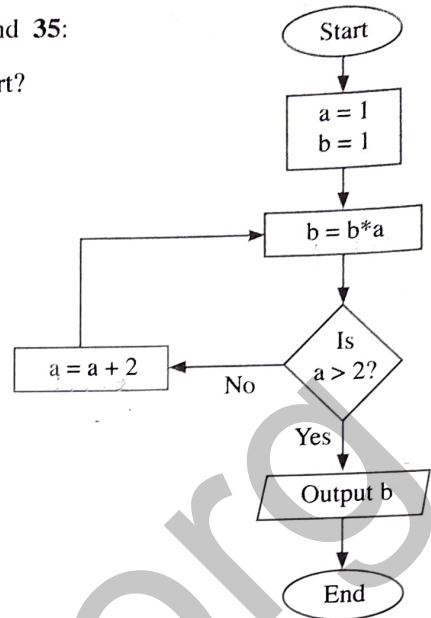
- Consider the given flowchart to answer the questions 34 and 35:

34. What will be displayed as the output of the given flowchart?

- (1) 1 is displayed.
- (2) 3 is displayed.
- (3) 15 is displayed.
- (4) Nothing is displayed.

35. If the labels 'Yes' and 'No' are interchanged in the given flowchart, what will be displayed as its output?

- (1) 1 is displayed.
- (2) 3 is displayed.
- (3) 15 is displayed.
- (4) Nothing is displayed.



36. How many times will the statement "count = count - 3" execute in the following code segment?

```

count=12
WHILE count >= 3
    count = count - 3
END WHILE
    
```

- (1) 3
- (2) 4
- (3) 5
- (4) 6

- Consider the following "Books" array which is used to store prices of 8 books to answer questions 37 and 38.

Books:	96	75	105	200	54	100	63	80
--------	----	----	-----	-----	----	-----	----	----

37. Which of the following correctly defines the "Books" array in a PASCAL program?

- (1) var Books = array[7];
- (2) var Books : array[0-7];
- (3) var Books : array[0..7] of integer;
- (4) var Books : array[0 to 7] of integer;

38. Which of the following represents the most expensive book?

- (1) Book[3]
- (2) Books[3]
- (3) Book[4]
- (4) Books[4]

39. Consider the following logic gate:



When B = 1, then what would definitely be the output at Q?

- (1) A
- (2)  $\bar{A}$
- (3) A + B
- (4)  $\bar{A} + B$

40. Given below is the truth table for a logic gate with inputs A, B and output Q:

A	B	Q
0	0	1
0	1	1
1	0	1
1	1	0

What is the logic gate indicated by the above truth table?

- (1) AND
- (2) NAND
- (3) NOR
- (4) OR